

The MathLesson 44

Division - Starting concepts

www.readinglesson.com

www.mathlesson.com

Mountcastle Company

1 $2 - 3 =$

2 $3 - 2 =$

3 $4 - 2 =$


4 $5 - 2 =$

Name _____

Date _____


Score _____

1.



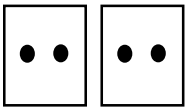
How many dots total? _____
 How many dots in each box? _____
 How many boxes? _____

6.




How many dots total? _____
 How many dots in each box? _____
 How many boxes? _____

2.



How many dots total? _____
 How many dots in each box? _____
 How many boxes? _____

7.




How many dots total? _____
 How many dots in each box? _____
 How many boxes? _____

3.



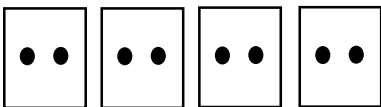
How many dots total? _____
 How many dots in each box? _____
 How many boxes? _____

8.




How many dots total? _____
 How many dots in each box? _____
 How many boxes? _____

4.




How many dots total? _____
 How many dots in each box? _____
 How many boxes? _____

9.



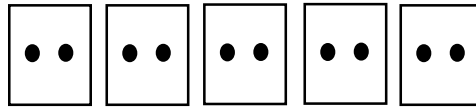
How many dots total? _____
 How many dots in each box? _____
 How many boxes? _____

5.



How many dots total? _____
 How many dots in each box? _____
 How many boxes? _____

10.




How many dots total? _____
 How many dots in each box? _____
 How many boxes? _____

Name _____

Date _____


Score _____

1.



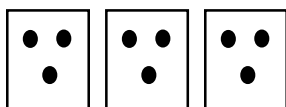
How many dots total? _____
 How many dots in each box? _____
 How many boxes? _____

6.




How many dots total? _____
 How many dots in each box? _____
 How many boxes? _____

2.



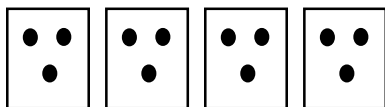
How many dots total? _____
 How many dots in each box? _____
 How many boxes? _____

7.



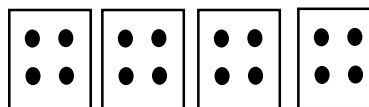
How many dots total? _____
 How many dots in each box? _____
 How many boxes? _____

3.



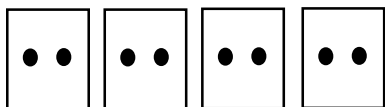
How many dots total? _____
 How many dots in each box? _____
 How many boxes? _____

8.




How many dots total? _____
 How many dots in each box? _____
 How many boxes? _____

4.




How many dots total? _____
 How many dots in each box? _____
 How many boxes? _____

9.




How many dots total? _____
 How many dots in each box? _____
 How many boxes? _____

5.



How many dots total? _____
 How many dots in each box? _____
 How many boxes? _____

10.





How many dots total? _____
 How many dots in each box? _____
 How many boxes? _____


Name _____

Date _____

Score _____




1.



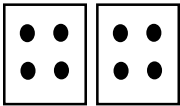
How many dots total? _____
 How many dots in each box? _____
 How many boxes? _____

6.




How many dots total? _____
 How many dots in each box? _____
 How many boxes? _____

2.




How many dots total? _____
 How many dots in each box? _____
 How many boxes? _____

7.




How many dots total? _____
 How many dots in each box? _____
 How many boxes? _____

3.



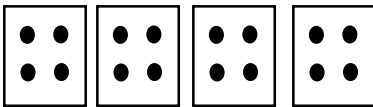
How many dots total? _____
 How many dots in each box? _____
 How many boxes? _____

8.




How many dots total? _____
 How many dots in each box? _____
 How many boxes? _____

4.




How many dots total? _____
 How many dots in each box? _____
 How many boxes? _____

9.




How many dots total? _____
 How many dots in each box? _____
 How many boxes? _____

5.



How many dots total? _____
 How many dots in each box? _____
 How many boxes? _____

10.




How many dots total? _____
 How many dots in each box? _____
 How many boxes? _____

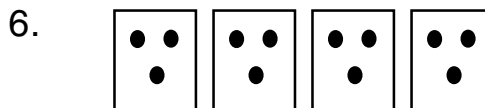
Name _____

Date _____

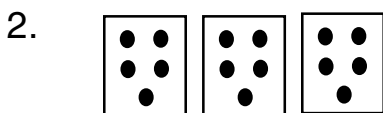
Score _____




How many dots total? _____
 How many dots in each box? _____
 How many boxes? _____




How many dots total? _____
 How many dots in each box? _____
 How many boxes? _____




How many dots total? _____
 How many dots in each box? _____
 How many boxes? _____




How many dots total? _____
 How many dots in each box? _____
 How many boxes? _____




How many dots total? _____
 How many dots in each box? _____
 How many boxes? _____



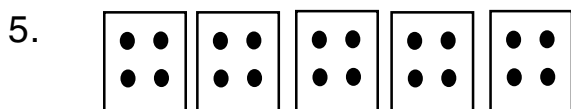
How many dots total? _____
 How many dots in each box? _____
 How many boxes? _____




How many dots total? _____
 How many dots in each box? _____
 How many boxes? _____



How many dots total? _____
 How many dots in each box? _____
 How many boxes? _____



How many dots total? _____
 How many dots in each box? _____
 How many boxes? _____

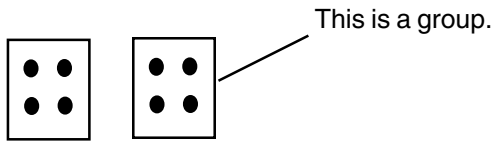


How many dots total? _____
 How many dots in each box? _____
 How many boxes? _____

Name _____

Date _____

Score _____



How many dots total? _____

How many dots in each group? _____


How many groups? _____

Division sentence:

$$\underline{8} \div \underline{2} = \underline{4}$$

8 divided by 2 equals 4.

_____	_____	_____
total	in each	groups
dots	group	




How many dots total? _____

How many dots in each group? _____

How many groups? _____

$$\underline{\quad} \div \underline{\quad} = \underline{\quad}$$




How many dots total? _____

How many dots in each group? _____

How many groups? _____

$$\underline{\quad} \div \underline{\quad} = \underline{\quad}$$




How many dots total? _____

How many dots in each group? _____

How many groups? _____

$$\underline{\quad} \div \underline{\quad} = \underline{\quad}$$




How many dots total? _____

How many dots in each group? _____

How many groups? _____

$$\underline{\quad} \div \underline{\quad} = \underline{\quad}$$




How many dots total? _____

How many dots in each group? _____

How many groups? _____

$$\underline{\quad} \div \underline{\quad} = \underline{\quad}$$



How many dots total? _____

How many dots in each group? _____

How many groups? _____

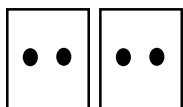
$$\underline{\quad} \div \underline{\quad} = \underline{\quad}$$

Name _____

Date _____


Score _____

1.



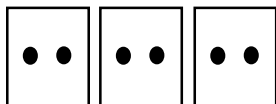
How many dots total? _____
 How many dots in each group? _____
 How many groups? _____
 _____ ÷ _____ = _____

5.



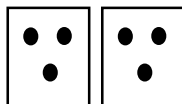
How many dots total? _____
 How many dots in each group? _____
 How many groups? _____
 _____ ÷ _____ = _____

2.



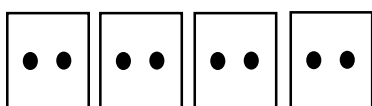
How many dots total? _____
 How many dots in each group? _____
 How many groups? _____
 _____ ÷ _____ = _____

6.



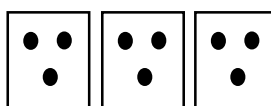
How many dots total? _____
 How many dots in each group? _____
 How many groups? _____
 _____ ÷ _____ = _____

3.




How many dots total? _____
 How many dots in each group? _____
 How many groups? _____
 _____ ÷ _____ = _____

7.



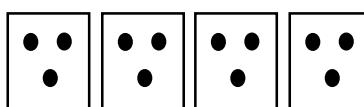
How many dots total? _____
 How many dots in each group? _____
 How many groups? _____
 _____ ÷ _____ = _____

4.



How many dots total? _____
 How many dots in each group? _____
 How many groups? _____
 _____ ÷ _____ = _____

8.




How many dots total? _____
 How many dots in each group? _____
 How many groups? _____
 _____ ÷ _____ = _____

Name _____

Date _____

Score _____

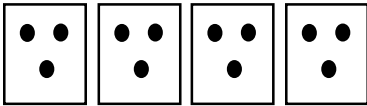
1.



How many dots total? _____
 How many dots in each group? _____
 How many groups? _____

_____ ÷ _____ = _____

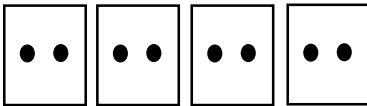
2.



How many dots total? _____
 How many dots in each group? _____
 How many groups? _____

_____ ÷ _____ = _____


3.



How many dots total? _____
 How many dots in each group? _____
 How many groups? _____

_____ ÷ _____ = _____


4.



How many dots total? _____
 How many dots in each group? _____
 How many groups? _____

_____ ÷ _____ = _____


5.



How many dots total? _____
 How many dots in each group? _____
 How many groups? _____

_____ ÷ _____ = _____


6.



How many dots total? _____
 How many dots in each group? _____
 How many groups? _____

_____ ÷ _____ = _____


7.



How many dots total? _____
 How many dots in each group? _____
 How many groups? _____

_____ ÷ _____ = _____

8.



How many dots total? _____
 How many dots in each group? _____
 How many groups? _____

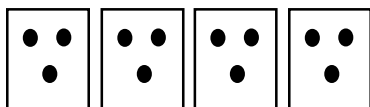
_____ ÷ _____ = _____

Name _____

Date _____

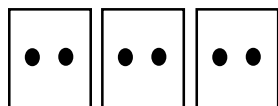
Score _____

1.



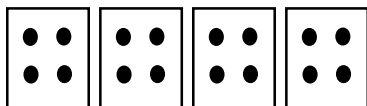
How many dots total? _____
 How many dots in each group? _____
 How many groups? _____
 _____ ÷ _____ = _____

2.



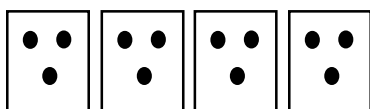
How many dots total? _____
 How many dots in each group? _____
 How many groups? _____
 _____ ÷ _____ = _____

3.




How many dots total? _____
 How many dots in each group? _____
 How many groups? _____
 _____ ÷ _____ = _____

4.




How many dots total? _____
 How many dots in each group? _____
 How many groups? _____
 _____ ÷ _____ = _____

5.




How many dots total? _____
 How many dots in each group? _____
 How many groups? _____
 _____ ÷ _____ = _____

6.




How many dots total? _____
 How many dots in each group? _____
 How many groups? _____
 _____ ÷ _____ = _____

7.



How many dots total? _____
 How many dots in each group? _____
 How many groups? _____
 _____ ÷ _____ = _____

8.




How many dots total? _____
 How many dots in each group? _____
 How many groups? _____
 _____ ÷ _____ = _____

Name _____

Date _____

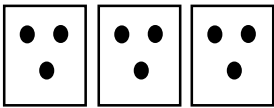
Score _____

1.



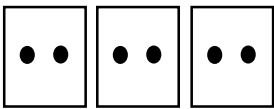
How many dots total? _____
 How many dots in each group? _____
 How many groups? _____
 _____ ÷ _____ = _____

2.




How many dots total? _____
 How many dots in each group? _____
 How many groups? _____
 _____ ÷ _____ = _____

3.




How many dots total? _____
 How many dots in each group? _____
 How many groups? _____
 _____ ÷ _____ = _____

4.




How many dots total? _____
 How many dots in each group? _____
 How many groups? _____
 _____ ÷ _____ = _____

5.




How many dots total? _____
 How many dots in each group? _____
 How many groups? _____
 _____ ÷ _____ = _____

6.




How many dots total? _____
 How many dots in each group? _____
 How many groups? _____
 _____ ÷ _____ = _____

7.



How many dots total? _____
 How many dots in each group? _____
 How many groups? _____
 _____ ÷ _____ = _____

8.




How many dots total? _____
 How many dots in each group? _____
 How many groups? _____
 _____ ÷ _____ = _____


Name _____

Date _____

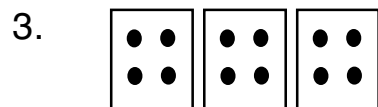
Score _____




How many dots total? _____
 How many dots in each group? _____
 How many groups? _____
 _____ ÷ _____ = _____




How many dots total? _____
 How many dots in each group? _____
 How many groups? _____
 _____ ÷ _____ = _____



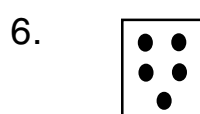
How many dots total? _____
 How many dots in each group? _____
 How many groups? _____
 _____ ÷ _____ = _____




How many dots total? _____
 How many dots in each group? _____
 How many groups? _____
 _____ ÷ _____ = _____




How many dots total? _____
 How many dots in each group? _____
 How many groups? _____
 _____ ÷ _____ = _____



How many dots total? _____
 How many dots in each group? _____
 How many groups? _____
 _____ ÷ _____ = _____



How many dots total? _____
 How many dots in each group? _____
 How many groups? _____
 _____ ÷ _____ = _____




How many dots total? _____
 How many dots in each group? _____
 How many groups? _____
 _____ ÷ _____ = _____

Name _____

Date _____


Score _____

1.




_____ $\dot{\quad}$ _____
total in each
dots group groups _____

5.



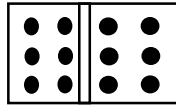
_____ $\dot{\quad}$ _____
total in each
dots group groups _____

2.



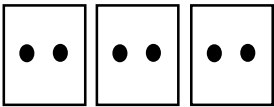
_____ $\dot{\quad}$ _____
total in each
dots group groups _____

6.




_____ $\dot{\quad}$ _____
total in each
dots group groups _____

3.




_____ $\dot{\quad}$ _____
total in each
dots group groups _____

7.




_____ $\dot{\quad}$ _____
total in each
dots group groups _____

4.



_____ $\dot{\quad}$ _____
total in each
dots group groups _____

8.




_____ $\dot{\quad}$ _____
total in each
dots group groups _____

Name _____

Date _____


Score _____

1.




_____ $\dot{\quad}$ _____
total in each groups
dots in group s

5.




_____ $\dot{\quad}$ _____
total in each groups
dots in group s

2.




_____ $\dot{\quad}$ _____
total in each groups
dots in group s

6.




_____ $\dot{\quad}$ _____
total in each groups
dots in group s

3.



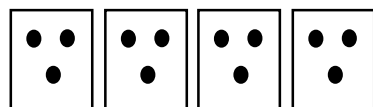
_____ $\dot{\quad}$ _____
total in each groups
dots in group s

7.



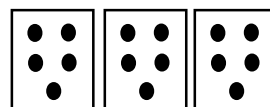
_____ $\dot{\quad}$ _____
total in each groups
dots in group s

4.



_____ $\dot{\quad}$ _____
total in each groups
dots in group s

8.




_____ $\dot{\quad}$ _____
total in each groups
dots in group s

Name _____

Date _____


Score _____

1.



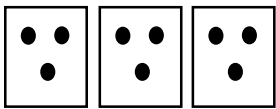
_____ total dots $\dot{\quad}$ in each group $\bar{\quad}$ groups _____

5.




_____ total dots $\dot{\quad}$ in each group $\bar{\quad}$ groups _____

2.




_____ total dots $\dot{\quad}$ in each group $\bar{\quad}$ groups _____

6.




_____ total dots $\dot{\quad}$ in each group $\bar{\quad}$ groups _____

3.



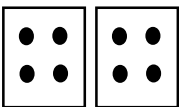
_____ total dots $\dot{\quad}$ in each group $\bar{\quad}$ groups _____

7.




_____ total dots $\dot{\quad}$ in each group $\bar{\quad}$ groups _____

4.



_____ total dots $\dot{\quad}$ in each group $\bar{\quad}$ groups _____

8.

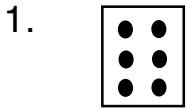


_____ total dots $\dot{\quad}$ in each group $\bar{\quad}$ groups _____


Name _____

Date _____


Score _____




_____ total dots $\dot{\quad}$ in each group _____ groups




_____ total dots $\dot{\quad}$ in each group _____ groups




_____ total dots $\dot{\quad}$ in each group _____ groups




_____ total dots $\dot{\quad}$ in each group _____ groups




_____ total dots $\dot{\quad}$ in each group _____ groups



_____ total dots $\dot{\quad}$ in each group _____ groups



_____ total dots $\dot{\quad}$ in each group _____ groups



_____ total dots $\dot{\quad}$ in each group _____ groups

Lesson 44

Name	Date	Score
------	------	-------

Page 2

- | | |
|-------------|--------------|
| 1. 3, 1, 3 | 6. 12, 3, 4 |
| 2. 4, 2, 2 | 7. 8, 4, 2 |
| 3. 6, 2, 3 | 8. 12, 4, 3 |
| 4. 8, 2, 4 | 9. 10, 5, 2 |
| 5. 15, 3, 3 | 10. 10, 2, 5 |

Page 3

- | | |
|-------------|--------------|
| 1. 6, 3, 2 | 6. 12, 3, 4 |
| 2. 9, 3, 3 | 7. 12, 4, 3 |
| 3. 12, 3, 4 | 8. 16, 4, 4 |
| 4. 8, 2, 4 | 9. 10, 5, 2 |
| 5. 9, 3, 3 | 10. 15, 5, 3 |

Page 4

- | | |
|-------------|--------------|
| 1. 4, 4, 1 | 6. 12, 3, 4 |
| 2. 8, 4, 2 | 7. 12, 4, 3 |
| 3. 12, 4, 3 | 8. 8, 4, 2 |
| 4. 16, 4, 4 | 9. 10, 5, 2 |
| 5. 9, 3, 3 | 10. 15, 5, 3 |

Page 5

- | | |
|-------------|--------------|
| 1. 10, 5, 2 | 6. 12, 3, 4 |
| 2. 15, 5, 3 | 7. 15, 5, 3 |
| 3. 12, 3, 4 | 8. 16, 4, 4 |
| 4. 20, 5, 4 | 9. 10, 5, 2 |
| 5. 20, 4, 5 | 10. 15, 5, 3 |

Lesson 44

Name	Date	Score
------	------	-------

Page 6

- | | |
|-------------|-------------|
| 1. 8, 4, 2 | 4. 12, 3, 4 |
| 2. 12, 4, 3 | 5. 8, 4, 2 |
| 3. 16, 4, 3 | 6. 10, 5, 2 |

Page 7

- | | |
|-------------|-------------|
| 1. 4, 2, 2 | 5. 3, 3, 1 |
| 2. 6, 2, 3 | 6. 6, 3, 2 |
| 3. 8, 2, 4 | 7. 9, 3, 3 |
| 4. 10, 2, 5 | 8. 12, 3, 4 |

Page 8

- | | |
|-------------|-------------|
| 1. 9, 3, 3 | 5. 8, 4, 2 |
| 2. 12, 3, 4 | 6. 12, 4, 3 |
| 3. 8, 2, 4 | 7. 16, 4, 4 |
| 4. 10, 2, 5 | 8. 20, 4, 5 |

Page 9

- | | |
|-------------|-------------|
| 1. 12, 3, 4 | 5. 5, 5, 1 |
| 2. 6, 2, 3 | 6. 10, 5, 2 |
| 3. 16, 4, 4 | 7. 15, 5, 3 |
| 4. 12, 3, 4 | 8. 20, 5, 4 |

Page 10

- | | |
|-------------|-------------|
| 1. 12, 4, 3 | 5. 8, 4, 2 |
| 2. 9, 3, 3 | 6. 12, 6, 2 |
| 3. 6, 2, 3 | 7. 18, 6, 3 |
| 4. 12, 4, 3 | 8. 24, 6, 4 |

Lesson 44

Name	Date	Score
------	------	-------

Page 11

- | | |
|-------------|-------------|
| 1. 6, 6, 1 | 5. 12, 6, 2 |
| 2. 10, 5, 2 | 6. 5, 5, 1 |
| 3. 12, 4, 3 | 7. 10, 5, 2 |
| 4. 12, 3, 4 | 8. 15, 5, 3 |

Page 12

- | | |
|-------------|-------------|
| 1. 12, 4, 3 | 5. 8, 4, 2 |
| 2. 9, 3, 3 | 6. 12, 6, 2 |
| 3. 6, 2, 3 | 7. 18, 6, 3 |
| 4. 12, 4, 3 | 8. 24, 6, 4 |

Page 13

- | | |
|-------------|-------------|
| 1. 6, 6, 1 | 5. 12, 6, 2 |
| 2. 10, 5, 2 | 6. 5, 5, 1 |
| 3. 12, 4, 3 | 7. 10, 5, 2 |
| 4. 12, 3, 4 | 8. 15, 5, 3 |

Page 14

- | | |
|-------------|-------------|
| 1. 15, 5, 3 | 5. 8, 4, 2 |
| 2. 9, 3, 3 | 6. 21, 7, 3 |
| 3. 6, 2, 3 | 7. 18, 6, 3 |
| 4. 8, 4, 2 | 8. 24, 6, 4 |

Page 15

- | | |
|-------------|-------------|
| 1. 6, 6, 1 | 5. 12, 6, 2 |
| 2. 15, 5, 3 | 6. 16, 4, 4 |
| 3. 14, 4, 3 | 7. 10, 5, 2 |
| 4. 18, 6, 3 | 8. 20, 5, 4 |